


















Length word problems


Show how you worked out the answer

<p>The length of the pen is 9cm </p> <p>The length of the pencil is 5cm </p> <p>What is the total length of the pen and pencil?</p>	<p>The length of the book is 11cm </p> <p>The length of the toy car is 4cm </p> <p>What is the total length of the book and toy car?</p>
<p>The length of the CD box is 15cm </p> <p>The length of the rubber is 3cm </p> <p>What is the total length of the CD box and rubber?</p>	<p>The length of the DVD box is 17cm </p> <p>The length of the lego brick is 4cm </p> <p>What is the total length of the DVD box and lego brick?</p>
<p>The length of the glue stick is 20cm </p> <p>The length of the stapler is 5cm </p> <p>What is the total length of the glue stick box and stapler?</p>	<p>The length of the whiteboard is 22cm </p> <p>The length of the hole punch is 4cm </p> <p>What is the total length of the hole punch and whiteboard?</p>
<p>Sam measures the length of a pencil. It measures 6cm in length. What is the total length of 2 pencils?</p> <p> </p>	<p>Ben measures the length of a table. It measures 10cm in length. What is the total length of 2 tables?</p> <p> </p>

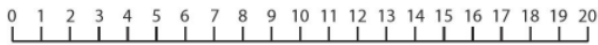
Length word problems


Show how you worked out the answer


The length of the pen is **5cm** 

The length of the pencil is **2cm** 


What is the total length of the pen and pencil?




The length of the book is **7cm** 

The length of the toy car is **2cm** 

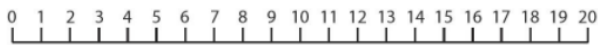
What is the total length of the book and toy car?




The length of the CD box is **8cm** 

The length of the rubber is **3cm** 


What is the total length of the CD box and rubber?





The length of the DVD box is **9cm** 

The length of the lego brick is **3cm** 

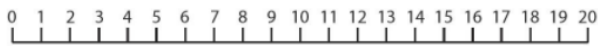
What is the total length of the DVD box and lego brick?





The length of the glue stick is **11cm** 

The length of the stapler is **2cm** 


What is the total length of the glue stick box and stapler?



The length of the whiteboard is **12cm** 

The length of the hole punch is **4cm** 

What is the total length of the hole punch and whiteboard?



Sam measures the length of a pencil. It measures **3cm** in length. What is the total length of 2 pencils?



Ben measures the length of a table. It measures **4cm** in length. What is the total length of 2 tables?

